

FOOTBALL SCHOOL



















ACTIVITY KIT




COUNTING KIT

Can you work out the numerical value of each symbol? The number at the end of each row or column is the sum of the values in that row or column.

				12
				16
				12
				15
12	18	10	15	


 is number.....


 is number.....


 is number.....

 is number.....

 is number.....

 is number.....

 is number.....



FOOTBALL SCHOOL




ACTIVITY KIT



CROSS IT, MO!

A1




Across:

1. Merseyside club (7)
3. A hat-trick is three of them (5)
6. Alexander-Arnold (5)
7. Gunners (7)

Down:

1. Mo Salah's national team (5)
2. Mascot of Crystal Palace, Benfica, Lazio and Eintracht Frankfurt (5)
4. Villa (5)
5. Bone in head (5)



FOOTBALL SCHOOL



ACTIVITY KIT



TABLE TEASER



When two football teams play each other in a league, the winning team gets 3 points and the losing team gets 0 points. If they draw, they get 1 point each. At the end of a competition between Argentina, Brazil and Peru, the table looked like this. Can you fill in the scoreboards below?


	Matches played	Goals scored	Goals conceded	Points
Brazil	2	3	1	6
Peru	2	2	2	3
Argentina	2	0	2	0

Brazil v. Peru	
Brazil	<input type="text"/>
Peru	<input type="text"/>

Peru v. Argentina	
Peru	<input type="text"/>
Argentina	<input type="text"/>

Brazil v. Argentina	
Brazil	<input type="text"/>
Argentina	<input type="text"/>

Tip: goals conceded means the number of goals let in.



FOOTBALL SCHOOL




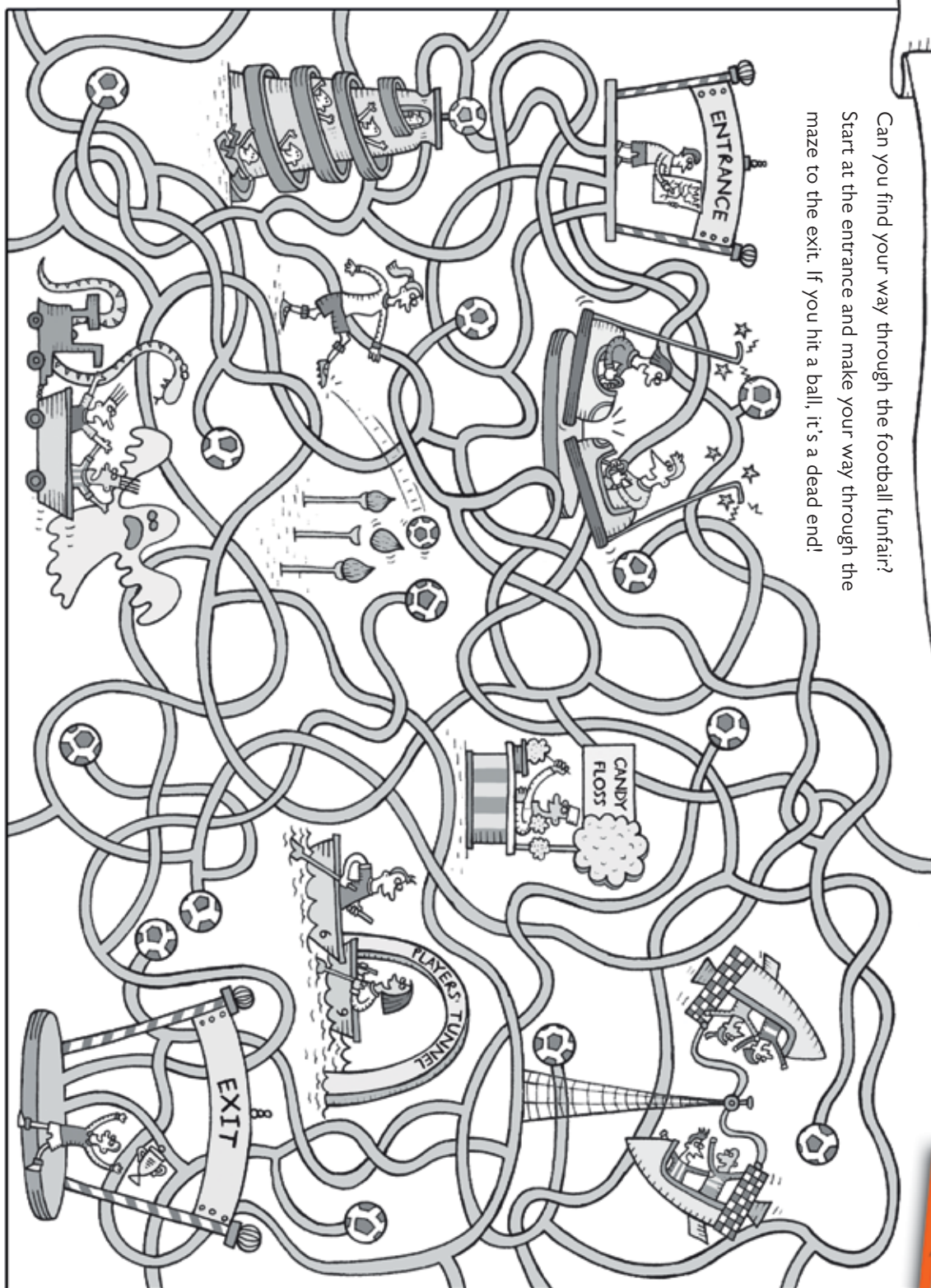
ACTIVITY KIT



FOOTBALL FUNFAIR



Can you find your way through the football funfair?
Start at the entrance and make your way through the
maze to the exit. If you hit a ball, it's a dead end!




FOOTBALL SCHOOL


ACTIVITY KIT


ANSWERS


TABLE TEASER


COUNTING KIT


 is number 4


 is number 3

 is number 6

 is number 2

 is number 5

 is number 1

 is number 8

Argentina scored 0 points, so they must have lost both their games. They didn't score any goals, so we can put 0 as their score to both their games. Peru conceded two goals. We know Argentina didn't score these, so Brazil must have scored them in their match against Peru. So you can put 2 in Brazil's score for Brazil v. Peru.

Brazil scored 3 goals. We know 2 of these were against Peru. So the third goal must have been in their other match against Argentina. We can put 1 in their score.

We also know Brazil let in 1 goal. It can't have been in their match against Argentina, so 1 must be Peru's score against Brazil.


Peru scored 2 goals in total. So their other goal must be the winning goal against Argentina.

Brazil v. Peru	
Brazil	2
Peru	1

Peru v. Argentina	
Peru	1
Argentina	0

Brazil v. Argentina	
Brazil	1
Argentina	0

FOOTBALL FUNFAIR



CROSS IT, MO!

1. E	V	2. E	R	T	O	N
G		A				
Y		3. G	O	4. A	L	5. S
P		L		S		K
6. T	R	E	N	T		U
				O		L
7. A	R	S	E	N	A	L

